



# Let's Get Started Orienteering

## Part 4: Orienteering Maps



Match the words to the correct symbols by drawing a line from the word to an example of each on the map.

Fence

High Fence

Private Land

Wall

Pond

Thicket



Rough Open

Open Land

Contour

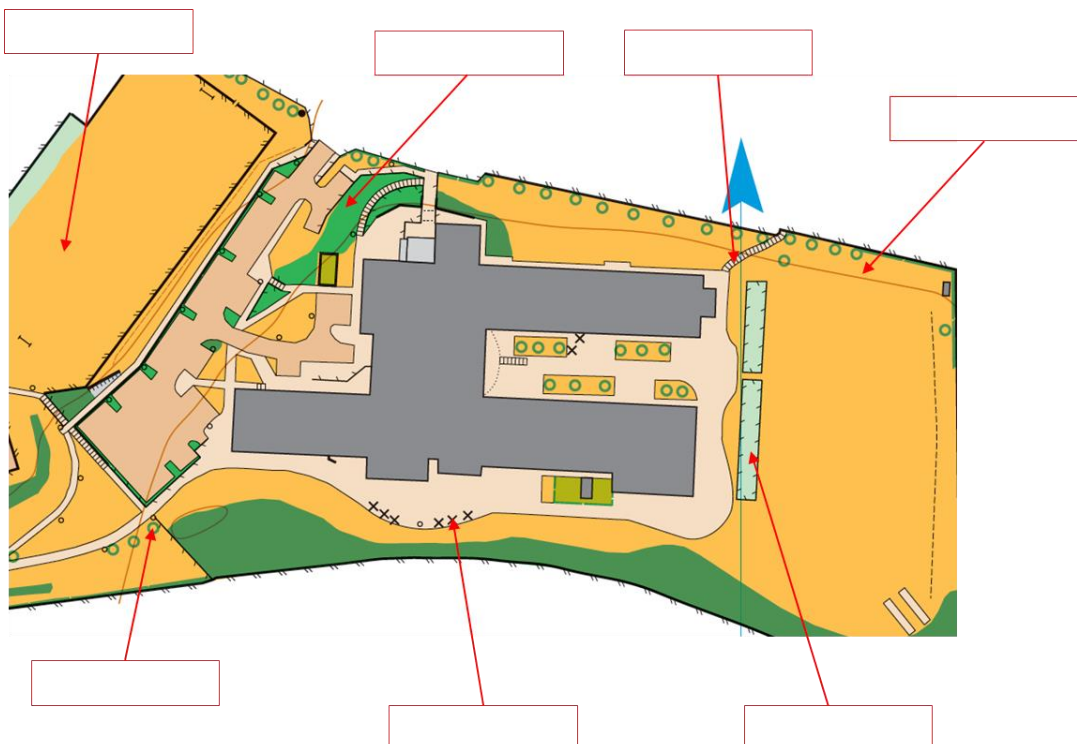
Paved

Building

Single Tree



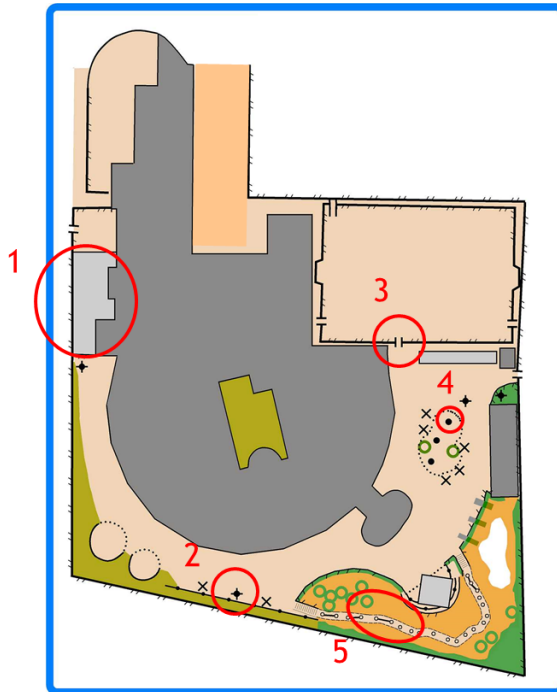
Fill in the boxes to name the symbols





There are some symbols here I don't know

There are 5 other symbols indicated in the map below. Can you find the correct description (A/B/C/D/E) to match the numbered circles?



- A. Covered area/Canopy
- B. Gate
- C. Boulder
- D. High Tower/Floodlight
- E. Linked Play Equipment

On some of the maps you can see a lighter peach and a darker peach colour. Why do you think there are 2 different shades in each of these school maps? What are they representing?

---




---

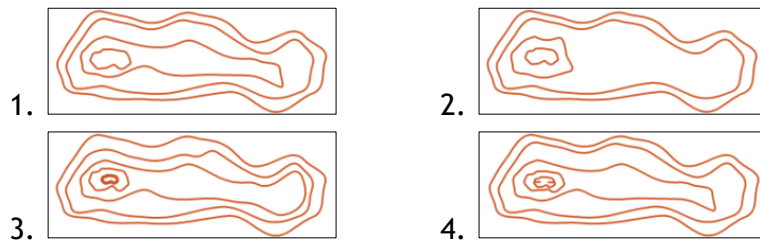
### Symbols

Play the Symbol Matching Game. How quickly can you match them all?

### Contours

Match the correct profile to the contours.





## Maps

Have a look at some of the school maps on the website. Could you design a course on one of them and say what each control would be on?

## Additional Activities

Draw a map of your garden, or part of a local park or playground. Try to use the correct symbols.

Make up a course on your map for someone else to try.