

















































































































SOA Puzzle 71 Solution

Scottish Towns and Villages

Identify 25 towns and villages in Scotland from the pictorial descriptions below. A and B are examples to give you the idea, though some are more cryptic. They start easy with the first six all in Dumfries & Galloway, then moving roughly clockwise round Scotland.

1										(8) Lochfoot
2										(10) Sandyhills
3										(7) Colvend Saddle = Col + V + end
4										(10) Rockcliffe
5										(7) Powfoot
6										(7) Mennock
7										(9) Cairnryan
8										(3) Ayr
9										(8) Millport Marsh, west end = M + ruined = ill + west = left or port
10										(13) Stenhousemuir S + X = ten + building = house + marsh, west edge = m + ruined, western part = 'rui' ruined = uir
11										(10) Benderloch
12										(7) Portree West = left or Port + tree
13										(6) Dunnet Ruined = done or Dun + overgrown = looks like a net
14										(5,7) North Kessock
15										(4) Dyke
16										(8) Aviemore
17										(10) Stonehaven 100 = ton
18										(9) Pitlochry
19										(5) Cupar or Bruar
20										(10) Kingsbarns Upper man = King + s + refreshment point = bar, + n + s
21										(10) Pittenweem Stream = Burn + T + firm ground = island
22										(11) Burntisland
23										(6) Rosyth
24										(8) Bathgate Water tank = Bath + gate
25										(10) Coldstream

Thanks to Dave McQuillen from SOLWAY for devising this fantastic puzzle.